

1. Which one is the correct sentence?
- A) Mumps is common among children.
  - B) Mumps are common among children.
  - C) Mumps is common between children.
  - D) Mumps are common between children.
2. The sergeant asked him to come to the Police station -  
Which one is the correct answer?
- A) Between 4 PM to 5 PM.
  - B) Between 4 PM and 5 PM.
  - C) Between 4 PM or 5 PM.
  - D) Between 4 PM till 5 PM.
3. Which one is the correct sentence ?
- A) He who speaks the truth, everybody loves him.
  - B) Everybody loves him who speaks the truth.
  - C) Everybody who loves him speaks the truth.
  - D) Everybody whom he loves speaks the truth.
4. A great man said, "If you can't fly, then run, if you can't run, then walk, if you can't walk, then crawl, but whatever you do, you have to keep \_\_\_\_\_" In this quote, emphasis is on -
- A) Flying.
  - B) Running.
  - C) Moving.
  - D) Crawling.
5. The correct form of the sentence "Did they not know who was he and where did he come from?" will be -
- A) Did they not know who was he and where he came from?
  - B) Did they not know who he was and where did he come from?
  - C) Did they not know who he was and where he came from?
  - D) Did not they know who he was and where he came from?
6. Choose the right word from below to fill in the blank in the following sentence -  
"The President gave \_\_\_\_\_ to the bill."
- A) Accent.
  - B) Ascent.
  - C) Assent.
  - D) Ascend

7. "The wise man advised us not to hate the poor". Replace the word 'hate' in the sentence with one of the following expressions:
- A) Look down.
  - B) Look against.
  - C) Look down upon.
  - D) Look down against.
8. Fill in the blank in the sentence "He studied hard lest he \_\_\_\_\_ fail" with an appropriate preposition from the following -
- A) would
  - B) should
  - C) could
  - D) might.
9. "What you told is Greek to me", In this sentence, the word 'Greek' means -
- A) The language of ancient Greece.
  - B) The language of medieval Greece.
  - C) The language of modern Greece.
  - D) Unknown.
10. Manohar is good \_\_\_\_\_ Cricket.
- A) about
  - B) in
  - C) at
  - D) of
11. Choose the Antonym of the word LOVE.
- A) Affection
  - B) Care
  - C) Like
  - D) Hate
12. Sarmistha is afraid \_\_\_\_\_ spiders.
- A) from
  - B) in
  - C) about
  - D) of
13. "He hardly tried for good luck." In this sentence, the word 'hardly' means -  
Which one is the correct answer?
- A) Almost not.
  - B) Sincerely.
  - C) In a diligent way.
  - D) Very seriously

(Set - B)

14. "Where there is a will there is a way." Fill in the blank space in this sentence with any one of the following words -

- A) Will
- B) Shall
- C) Should
- D) Would

15. "Yesterday Rahim as well as Karim \_\_\_\_\_ present in the meeting." Fill in the blank in this sentence with one of the following -

- A) Has been
- B) Was
- C) Had been
- D) Were

16. The expression "Think out of the box" means -

- A) Come out of the box and then think.
- B) Think in a conventional manner.
- C) Think in an innovative manner.
- D) Think inside the box.

17. Omnivorous animals are those who -

- A) Eat all kinds of food.
- B) Live on vegetables.
- C) Live in water
- D) Live in flocks

18. That he would treat me with this kind of misbehaviour was known to me. This sentence is -

- A) Fully correct
- B) Partially correct
- C) Substantially incorrect
- D) Incorrect

Questions : (19-27)

Choose the correct option to replace '?'

19. 8, 20, 36, 56, ?

- A) 80
- B) 100
- C) 64
- D) 84

$$\begin{array}{cccccc} & & & 24 & & 80 \\ 8 & 20 & 36 & 56 & - & \\ \hline & 12 & 16 & 20 & 24 & \end{array}$$

20. 1, 8, 4, 27, 9, ?

- A) 8
- B) 9
- C) 64
- D) 16

$$\begin{array}{cccccc} 1 & 8 & 4 & 27 & 9 & - \\ \hline 2^3 & 2^2 & 3^3 & 3^2 & 4^3 & \end{array}$$



21. 9, ?, 18, 28, 27, 21, 36, 14

- A) 30
- B) 35
- C) 23
- D) 40

9 — 18 28 27 21 36 14  
L L L L L  
12 1 6 15 — 22

9 — 18 28 27 21 36 14  
6<sup>2</sup> 4<sup>2</sup>

22. APZLT, CQYNR, ERXPP, GSWRN, ?

- A) KVIJUI
- B) JUUVK
- C) ITVTL
- D) KUUVJ

B D F HI

23. RAP, MAP, HOTFUN, ?

- A) HNE
- B) PGI
- C) STN
- D) CAT

3 23 5 6 8 184 9  
CWE FQH RDI

24. CWE, FQH, RDI, ?

- A) XBZ
- B) TGU
- C) MCO
- D) FUT

9  
9 30 18 28 27 21 36 14  
2<sup>3</sup>+1 3 3+3 4<sup>2</sup>+2 5<sup>2</sup>+3  
CWE FQH RDI  
DE FG I

25. Flow : River :: Stagnant : ?

- A) Rain
- B) Stream
- C) Pool
- D) Canal

26. Rupee : India :: Yen : ?

- A) Turkey
- B) America
- C) Japan
- D) China

27. Physician : Treatment :: Judge : ?

- A) Punishment
- B) Judgement
- C) Lawyer
- D) Court

(Set - B)

(6)

**Questions : (28-30)**

In each of the following questions two statements are given and these statements are followed by two conclusions numbered (1) and (2). You have to take the given two statements to be true even if they seem to be at variance from commonly known facts. Read the conclusions and then decide which of the given conclusions logically follows from the two given statements, disregarding commonly known facts.

28. **Statements:** Some actors are singers. All the singers are dancers.

**Conclusions:**

1. Some actors are dancers.
2. No singer is actor.

- A) Only (1) conclusion follows •  
B) Only (2) conclusion follows  
C) Either (1) or (2) follows  
D) Neither (1) nor (2) follows




29. **Statements:** All the harmoniums are instruments. All the instruments are flutes.

**Conclusions:**

1. All the flutes are instruments.
2. All the harmoniums are flutes.

- B) Only (2) conclusion follows •  
A) Only (1) conclusion follows  
C) Either (1) or (2) follows  
D) Neither (1) nor (2) follows

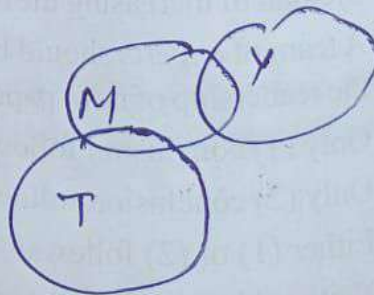


30. **Statements:** Some mangoes are yellow. Some tixo are mangoes.

**Conclusions:**

1. Some mangoes are green.
2. Tixo is a yellow.

- A) Only (1) conclusion follows  
B) Only (2) conclusion follows  
C) Either (1) or (2) follows  
 D) Neither (1) nor (2) follows



(Set - B)

(7)

[P.T.O.]



**Questions : (31-33)**

In each question below is given a statement followed by two conclusions numbered I and II. You have to assume everything in the statement to be true, then consider the two conclusions together and decide which of them logically follows beyond a reasonable doubt from the information given in the statement.

31. **Statements:** Government has spoiled many top ranking financial institutions by appointing bureaucrats as Directors of these institutions.

**Conclusions:**

1. Government should appoint Directors of the financial institutes taking into consideration the expertise of the person in the area of finance.
2. The Director of the financial institute should have expertise commensurate with the financial work carried out by the institute.

- A) Only (1) conclusion follows  
B) Only (2) conclusion follows  
C) Either (1) or (2) follows  
D) Both (1) and (2) follows

32. **Statements:** Population increase coupled with depleting resources is going to be the scenario of many developing countries in days to come.

**Conclusions:**

1. The population of developing countries will not continue to increase in future.
2. It will be very difficult for the governments of developing countries to provide its people decent quality of life.

- A) Only (1) conclusion follows  
B) Only (2) conclusion follows  
C) Either (1) or (2) follows  
D) Both (1) and (2) follows

33. **Statements:** Prime age school-going children in urban India have now become avid as well as more regular viewers of television, even in households without a TV. As a result there has been an alarming decline in the extent of readership of newspapers.

**Conclusions:**

1. Method of increasing the readership of newspapers should be devised.
2. A team of experts should be sent to other countries to study the impact of TV. on the readership of newspapers.

- A) Only (1) conclusion follows  
B) Only (2) conclusion follows  
C) Either (1) or (2) follows  
D) Neither (1) nor (2) follows

34. 'Meat' is related to 'Vegetarian' in the same way as 'Alcohol' is related to \_\_\_\_\_?

- A) Teetotaler
- B) Smoker
- C) Water
- D) Dietician

35. 'Chef' is related to 'Food' in the same way as 'Choreographer' is related to \_\_\_\_\_?

- A) Stage
- B) Music
- C) Dance
- D) Photography

36. Select the option that is related to the third number in the same way as the second number is related to the first number.  $4 : 8 :: 25 : \underline{\hspace{1cm}}$ ?

- A) 100
- B) 125
- C) 625
- D) 75

$$\begin{array}{ccc} 4 & 8 & 25 \\ 2^2 & 2^3 & 5^2 \end{array}$$

37. If + means '÷', - means '+', × means '-' and ÷ means '×', then what will be the value of the following expression.  $18 \div 6 - 27 + 3 \times 12 = ?$

- A) 92
- B) 105
- C) 95
- D) 107

$$\begin{array}{l} 18 \times 6 + 27 - 12 = \\ \frac{108}{9} \quad \frac{117}{12} \\ \hline 117 \quad 105 \end{array}$$

38. Introducing a girl, a boy said, "She is the daughter of the mother of the daughter of my aunt." How is the girl related to the boy?

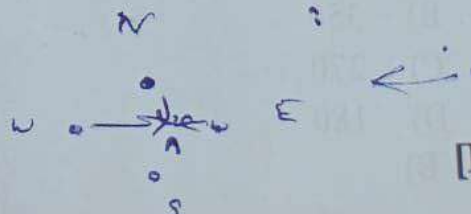
- A) Niece
- B) Aunt
- C) Cousin
- D) Daughter

Girl

Boy

39. One morning, Manish and Ali were talking to each other face to face at a crossing. If Ali's shadow was exactly to the left of Manish, which direction was Manish facing?

- A) East
- B) South
- C) West
- D) North



(Set - B)

(9)

[P.T.O.]



40. Arrange the following words in a logical and meaningful order.

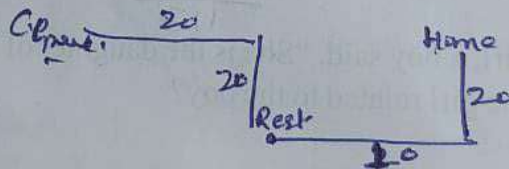
1. Writing ②
  2. Book ③
  3. Seller ④
  4. Idea ①
  5. Feedback
  6. Reader ?
- A) 4, 1, 2, 3, 6, 5 •  
B) 4, 1, 2, 6, 3, 5  
C) 4, 1, 3, 6, 5, 2  
D) 4, 1, 2, 6, 5, 3

41. Arrange the following in a logical and meaningful order.

1. World Cup Semi Final Matches
  2. World Cup Finals Match
  3. Organizing the World Cup
  4. Finalizing the participating teams
  5. Winner of the World Cup ?
- A) 5, 2, 3, 1, 4  
B) 4, 1, 2, 3, 5  
C) 4, 3, 1, 2, 5 →  
D) 4, 1, 3, 2, 5

42. Kedar left home and ran 20 km towards South, then turned right and ran 10 km. He took rest for ten minutes at the same spot and then again turned right and ran 20 km. After this he turned left and ran 20 km to the cricket ground. How many kilometers will he have to run back to reach his home by shortest route?

- A) 15 km  
B) 20 km  
C) 25 km  
D) 30 km •



43. The angles of the quadrilateral are in Ratio 4: 5: 10: 11. The angles are given below:

- A)  $36^\circ, 60^\circ, 108^\circ, 156^\circ$   
B)  $48^\circ, 60^\circ, 120^\circ, 132^\circ$   
C)  $52^\circ, 60^\circ, 122^\circ, 126^\circ$   
D)  $60^\circ, 60^\circ, 120^\circ, 120^\circ$

44. One fourth of one third of two fifth of a number is 15. What will be 40% of that number?

- A) 120  
B) 350  
C) 270  
D) 180

(Set - B)



45. The expression  $86.04/4000$  is equal to  
A) 0.10215  
B) 0.02151  
C) 0.15201  
D) 0.21015
46. A man sells two houses at the rate of Rs. 1.995 lakhs each. On one, he gains 5% and on other he loses 5%. His gain/loss percentage in the whole transaction is  
A) Loss = 0.25%  
B) Gain = 0.25%  
C) Loss = 2.5%  
D) Loss = 25%
47. A has to pay Rs. 220 to B after 1 year. B asks A to pay Rs. 110 in cash and defer the payment of Rs. 110 for 2 years. A agrees to it. If the rate of interest be 10% per annum, in this mode of payment.  
A) There is no gain or loss to any one  
B) A gains Rs. 7.34  
C) A loses Rs. 7.34  
D) A gains Rs. 11
48. Bombay Express left Delhi for Bombay at 14.30 hrs., travelling at a speed of 60km/h and Rajdhani Express left Delhi for Bombay on the same day at 16.30 hrs., travelling at a speed of 80kmph. How far away from Delhi will the two trains meet?  
A) 120km  
B) 360km  
C) 480km  
D) 500km
49. A and B can do piece of work in 72 days; B and C can do it in 120 days, A and C can do it in 90 days. In What time can A alone do it?  
A) 150 days  
B) 120 days  
C) 100 days  
D) 80 days
50. If  $5x^2 - 13xy + 6y^2 = 0$ , then  $x:y$  is :  
A) 5:3 or 1:2  
B) 3:5 or 2:1  
C) 2:1 only  
D) 5:3 only

51. If  $pqr = 1$ , then  $\left[ \frac{1}{1+p+q^{-1}} + \frac{1}{1+q+r^{-1}} + \frac{1}{1+r+p^{-1}} \right] = ?$

A) 0

B)  $\frac{1}{pq}$

C)  $pq$

D) 1

52. A certain sum of money at simple interest amounts to Rs. 1012 in  $\frac{5}{2}$  years and to Rs. 1067.20 in 4 years. The rate of interest per annum is

A) 2.5%

B) 3%

C) 4%

D) 5%

53. The linear equation  $6x - 12y = 0$  has

A) Unique solution

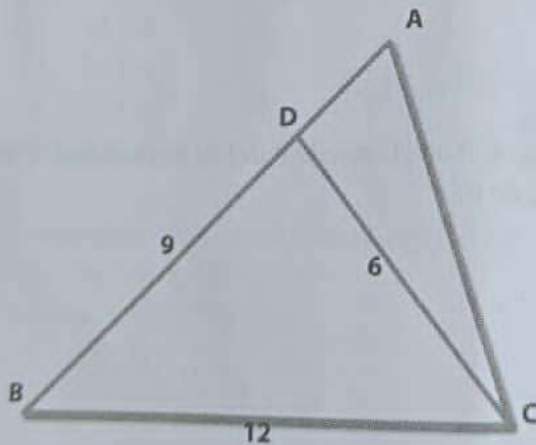
B) Two solutions

C) Infinite solutions

D) No solution

54. Consider triangle shown in figure where  $BC = 12\text{cm}$ ,  $DB = 9\text{cm}$ ,  $CD = 6\text{cm}$  and  $\angle BCD = \angle BAC$

What is ratio of perimeter of the triangle ADC to that of triangle BDC



A) 7:9

B) 8:9

C) 6:9

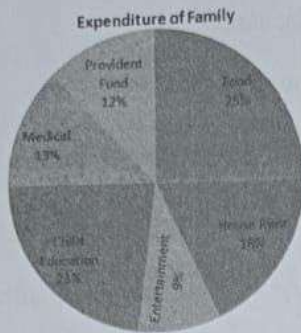
D) 5:9

(Set - B)

(12)



59. Directions: The pie chart given here represents the domestic expenditure of a family in percent. Study the chart and answer the following questions if the total monthly income of the family is Rs. 33,650.



The annual savings in the form of provident fund would be

- A) 48456  
B) 48540  
C) 44856  
D) 45480

60. Study the pattern:

$$1 \times 8 + 1 = 9$$

$$12 \times 8 + 2 = 98$$

$$123 \times 8 + 3 = 987$$

$$1234 \times 8 + 4 = 9876$$

$$12345 \times 8 + 5 = 98765$$

Write the answer for next two steps

- A) 987653, 9876543  
B) 987651, 9876542  
C) 987650, 9876542  
D) 987654, 9876543 •

61. What is the primary function of a Central Processing Unit (CPU)?

- A) Storage of data  
✓ B) Execution of instructions •  
C) Display of graphics  
D) Network communication

62. Which computer component is responsible for storing data in a long-term, non-volatile manner?

- A) RAM  
B) CPU  
✓ C) Hard Drive •  
D) Monitor

(Set - B)

Handwritten calculations for question 59:

$$33650 \times \frac{25}{100} = 8412.5$$

$$33650 \times \frac{13}{100} = 4374.5$$

$$33650 \times \frac{9}{100} = 3028.5$$

$$33650 \times \frac{18}{100} = 6057$$

$$33650 \times \frac{21}{100} = 7066.5$$

Sum of expenditures:  $8412.5 + 4374.5 + 3028.5 + 6057 + 7066.5 = 28939$

Provident Fund:  $33650 - 28939 = 4711$

Annual Savings:  $4711 \times 12 = 56532$

Handwritten calculations for question 60:

$$123456 \times 8 = 987648$$

$$1234567 \times 8 = 9876536$$

63. What is the main function of an input device?
- A) Display information
  - B) Process data
  - C) Enter data into the computer
  - D) Store data permanently
64. What is the purpose of an operating system?
- A) To perform arithmetic calculations
  - B) To manage hardware resources and run applications
  - C) To display graphics
  - D) To store and retrieve data
65. Which type of software is designed to protect a computer from viruses and malware?
- A) Word processor
  - B) Antivirus software
  - C) Web browser
  - D) Spreadsheet software
66. What is the primary function of a modem?
- A) To display images on the screen
  - B) To provide power to the computer
  - C) To connect the computer to the internet
  - D) To store data
67. What is the purpose of random access memory (RAM) in a computer?
- A) Long-term storage of data
  - B) Temporary storage of data and program instructions
  - C) Display of images
  - D) Data input through a keyboard
68. Which of the following is not an example of an output device?
- A) Printer
  - B) Speaker
  - C) Monitor
  - D) Keyboard
69. Which of the following is not a high-level programming language?
- A) Python
  - B) Assembly
  - C) Java
  - D) C++



77. What type of software is responsible for managing hardware components and providing a user interface?
- A) System software
  - B) Application software
  - C) Open-source software
  - D) Freeware
78. What is the primary characteristic of open-source software?
- A) It is always free of charge.
  - B) The source code is freely available and can be modified.
  - C) It is always developed by large corporations.
  - D) It is never used in commercial applications.
79. Which organization oversees the development of the open-source web browser Firefox?
- A) Google
  - B) Mozilla Foundation
  - C) Microsoft
  - D) Apple
80. What is a primary key in MS Access?
- A) A unique identifier for a record
  - B) A way to format text
  - C) A type of report
  - D) A form control
81. What does SQL stand for in the context of MS Access?
- A) Structured Query Language
  - B) System Query Logic
  - C) Structured Query Logic
  - D) System Query Language
82. What is the term used for a single slide in a PowerPoint presentation?
- A) Sheet
  - B) Frame
  - C) Slide
  - D) Card
83. What does PDF stand for?
- A) Portable Document Format
  - B) Personal Document File
  - C) Print Document Format
  - D) Plain Document File

84. What does URL stand for?  
A) Universal Resource Locator  
 B) Uniform Resource Locator •  
C) Universal Resource Link  
D) Uniform Resource Link
85. What does CC stand for in an email context?  
 A) Carbon Copy •  
B) Copy Content  
C) Confidential Copy  
D) Computer Copy
86. What is a computer virus?  
A) A type of computer hardware  
 B) A software program designed to damage or infect computers •  
C) A type of computer network  
D) A computer accessory
87. How do computer viruses typically spread?  
A) Through physical contact with infected computers  
 B) Via email attachments, downloads, and infected files •  
C) Through wireless networks only  
D) By overheating the computer's hardware
88. Which of the following is **NOT** a common objective of computer viruses?  
A) Stealing personal data  
B) Slowing down system performance  
 C) Spreading awareness about online security •  
D) Deleting or corrupting files
- \* 89. Which of the following is a well-known antivirus software developed by Symantec?  
 A) Norton Antivirus  
B) McAfee Antivirus  
C) Avast Antivirus  
D) Avira Antivirus
90. Which feature in antivirus software is designed to protect against malicious websites and online threats?  
 B) Parental controls •  
A) Firewall  
C) Anti-phishing  
D) System optimization

(Set - B)



- ✖ 91. Kiran Baliyan won which medal in which game, at the Asian Games 2023?
- ✓ A) Gold, Weight Lifting
  - B) Silver, Shot put
  - C) Bronze, Shot put
  - D) Bronze, weight lifting
- ✖ 92. Who is the military commander of Hamas's military wing during the Israel-Hamas 2023 conflict?
- A) Mohammed Deif
  - ✓ B) Ismail Haniyeh
  - C) Yahya Sinwar
  - D) Ayman Nofal
- ✖ 93. Arrobot, which has developed Unmanned Guided Vehicle (UGV) for the Indian armed forces, is
- A) A French company
  - B) A Russian startup
  - C) A startup incubated by IIT Bombay
  - ✓ D) A joint-venture startup based in Hyderabad
94. Which of the following passes is located in Jammu and Kashmir Union Territory?
- ✓ A) Banihal Pass
  - B) Changla Pass
  - C) Fotu La Pass
  - D) Khardung La Pass
95. Which of the following states does not share boundaries with other countries?
- ✓ A) Uttar Pradesh
  - B) Nagaland
  - C) Assam
  - D) Jharkhand
- ✖ 96. Which of the following state is smallest in terms of area?
- A) Rajasthan
  - B) Madhya Pradesh
  - ✓ C) Maharashtra
  - D) Uttar Pradesh

97. Which of the following is highest milk producing states in India?

- A) Rajasthan
- B) Gujarat
- C) Andhra Pradesh
- D) Punjab

98. Which of the following information is **NOT** collected during the census in India?

- A) Marital status
- B) Educational qualification
- C) Salary per month
- D) Occupation

99. Last census of India was conducted in

- A) Feb 2011 •
- B) March 2014
- C) Feb 2021
- D) Feb 2023

100. Which of the following was **NOT** ruler of Jammu and Kashmir?

- A) Aurangzeb
- B) Maharaja Ranjit Singh
- C) Maharaja Gulab Singh
- D) Queen Victoria •

101. Which one of the following is highest mountain range in Jammu and Kashmir?

- A) Zaskar Range •
- B) Nanga Parbat Range
- C) Nun Kun Range
- D) Amarnath Mountain

102. Which of the following is largest lake in Jammu and Kashmir with respect to area?

- A) Wular Lake •
- B) Dal Lake
- C) Anchar Lake
- D) Romushi

(Set - B)



103. Which of the following is the highest Maize producing state of India?
- A) Rajasthan
  - B) Madhya Pradesh
  - C) Jammu and Kashmir
  - D) Karnataka
104. Which of the following is a district in Jammu and Kashmir Union Territory?
- A) Kargil
  - B) Reasi
  - C) Gulmarg
  - D) Pahalgam
105. Which of the following statement is true regarding sowing of wheat in Jammu and Kashmir and Ladakh?
- A) Wheat is sown in Oct-Nov in Kashmir and in May in Ladakh
  - B) Wheat is sown in May in Kashmir and not sown in Ladakh
  - C) In both Ladakh and Kashmir, wheat is sown in May
  - D) What is not sown in both, Ladakh and Kashmir
106. Which among the following don't come under the purview of Right to Education?
- A) Government Schools
  - B) Private Schools
  - C) Madrasas
  - D) Government schools funded by Private Funds
107. Which of the following constitution amendment gave one third reservations to women at panchayat level?
- A) 73<sup>rd</sup>
  - B) 106<sup>th</sup>
  - C) 103<sup>rd</sup>
  - D) 31<sup>st</sup>
108. Which of the following goods is covered under the GST bill?
- A) Cooking gas
  - B) Liquor
  - C) Petrol
  - D) Diamonds

109. A private university named "Kaushal University" is assessable under the income tax act as

- A) A individual
- B) An artificial juridical person
- C) A local authority
- D) None of these

110. Which of the following is **NOT** the responsibility of a panchayat secretary?

- A) Recording participation and discussion during meetings of panchayat and gram sabha
- B) Maintains the village funds-collection and disbursal
- C) Helps in implementation of resolution of panchayat and gram sabha
- D) Responsible for conducting election and vote counting.

111. What is the minimum requirement on the number of meetings to be conducted by gram panchayat in Jammu and Kashmir.

- A) At least once a week
- B) At least once a month
- C) At least once in six months
- D) At least once in a year

112. According to 2011 census, what is average literacy rate in the state of Jammu and Kashmir

- A) Less than 65%
- B) More than 65% but less than 70%
- C) More than 70% and less than 75%
- D) More than 75%

113. In Jammu and Kashmir, maximum number of members in a gram panchayat can be

- A) 7
- B) 11
- C) 15
- D) 21

114. Who among the following made "**Bud Musjid**" in Kashmir?

- A) Shah Mir
- B) Sultan Sikandar
- C) Aurangzeb
- D) Rinchan

(Set - B)



115. Managers set targets and decide \_\_\_\_\_ their organization can achieve them.
- A) What
  - B) How
  - C) Which
  - D) Because
116. What are you \_\_\_\_\_ in the kitchen cupboard?
- A) Looking in
  - B) Looking on
  - C) Looking to
  - D) Looking for
117. "Man proposes, \_\_\_\_\_ disposes". Fill in the blank space in this saying with any one of the following words -
- A) Woman
  - B) God
  - C) Young girl
  - D) Goddess
118. She \_\_\_\_\_ the best apples from the basket.
- A) Choose
  - B) Chose
  - C) Was chosen
  - D) Choosing
119. We \_\_\_\_\_ at the party
- A) Enjoyed ourself
  - B) Enjoyed ourselves
  - C) Played with
  - D) Enjoyed
120. Choose the correctly spelt word
- A) Comittee
  - B) Committe
  - C) Comittee
  - D) Committee